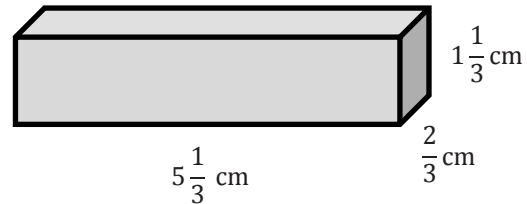


Lesson 11: Volume with Fractional Edge Lengths and Unit Cubes

Exercises

1. Use the prism to answer the following questions.

a. Calculate the volume.



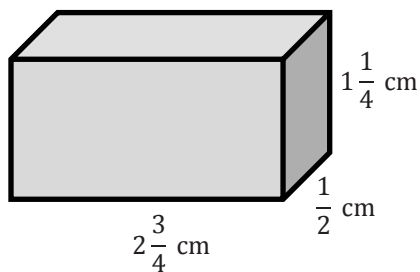
b. If you have to fill the prism with cubes whose side lengths are less than 1 cm, what size would be best?

c. How many of the cubes would fit in the prism?

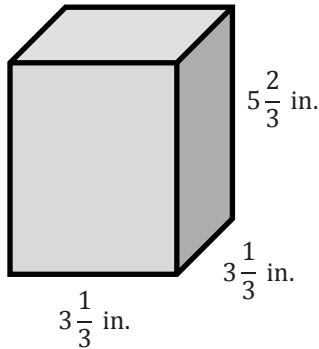
d. Use the relationship between the number of cubes and the volume to prove that your volume calculation is correct.

2. Calculate the volume of the following rectangular prisms.

a.



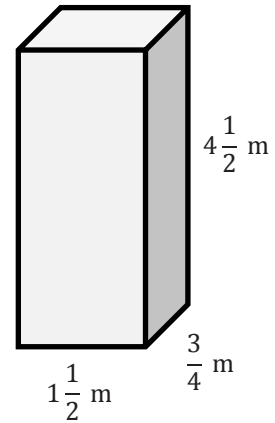
b.



3. A toy company is packaging its toys to be shipped. Some of the very small toys are placed inside a cube-shaped box with side lengths of $\frac{1}{2}$ in. These smaller boxes are then packed into a shipping box with dimensions of 12 in. \times $4\frac{1}{2}$ in. \times $3\frac{1}{2}$ in.
- How many small toys can be packed into the larger box for shipping?
 - Use the number of toys that can be shipped in the box to help determine the volume of the box.
4. A rectangular prism with a volume of 8 cubic units is filled with cubes. First, it is filled with cubes with side lengths of $\frac{1}{2}$ unit. Then, it is filled with cubes with side lengths of $\frac{1}{3}$ unit.
- How many more of the cubes with $\frac{1}{3}$ -unit side lengths than cubes with $\frac{1}{2}$ -unit side lengths will be needed to fill the prism?

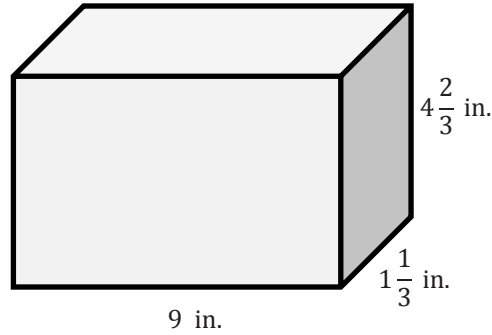
b. Why does it take more cubes with $\frac{1}{3}$ -unit side lengths to fill the prism?

5. Calculate the volume of the rectangular prism. Show two different methods for determining the volume.



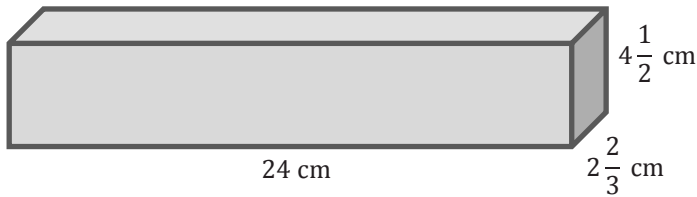
Problem Set

1. Answer the following questions using this rectangular prism:



- a. What is the volume of the prism?
 - b. Linda fills the rectangular prism with cubes that have side lengths of $\frac{1}{3}$ in. How many cubes does she need to fill the rectangular prism?
 - c. How is the number of cubes related to the volume?
 - d. Why is the number of cubes needed different than the volume?
 - e. Should Linda try to fill this rectangular prism with cubes that are $\frac{1}{2}$ in. long on each side? Why or why not?
2. Calculate the volume of the following prisms.

a.



b.

